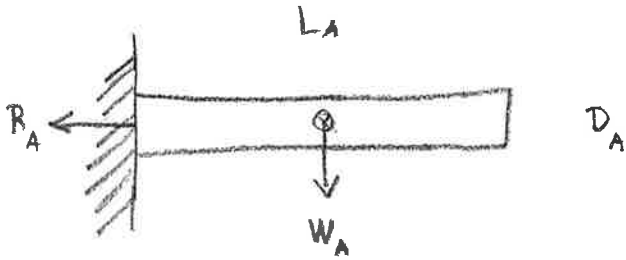


Ex 7.1) Limestone pillar problem



This limestone pillar is about to break.

$$D_A = 1 \text{ ft.}$$

$$L_A = 20 \text{ ft}$$

a.) How thick must we make a 30 foot pillar so it is about to break under its own weight? Well, comparing two prisms of different lengths and thicknesses

$$\frac{D_B}{D_A} = \frac{W_B L_B / R_B}{W_A L_A / R_A} \quad (\text{using law of lever for each prism})$$

$$= \left(\frac{\rho g D_B^2 L_B}{\rho g D_A^2 L_A} \right) \left(\frac{L_B}{L_A} \right) \left(\frac{R_A}{R_B} \right) \quad (\text{using formula for weight of prisms})$$

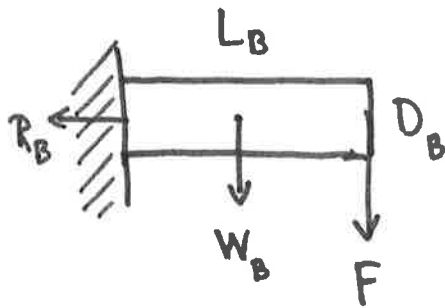
$$= \left(\frac{D_B^2 L_B^2}{D_A^2 L_A^2} \right) \left(\frac{D_A^2}{D_B^2} \right) \quad (\text{since } R \propto D^2)$$

$$\frac{D_B}{D_A} = \left(\frac{L_A}{L_B} \right)^2 = \left(\frac{20}{30} \right)^2 = \frac{4}{9}$$

So the diameter of B is

$$\boxed{2 \frac{1}{4} \text{ feet}}$$

EX7.1 b)



Force F applied to end of limestone pillar so that it's about to break.

What is F ?

For equilibrium:

$$R_B \frac{D_B}{2} = W_B \frac{L_B}{2} + FL_B$$

Support moment
breaking moments

Solve for F

$$F = \frac{R_B D_B}{2L_B} - \frac{W_B L_B}{2L_B} = \frac{R_B D_B}{2L_B} - \frac{W_B}{2}$$

but I know that for a different prism, A , which is about to break under its own weight

$$R_A \frac{D_A}{2} = W_A \frac{L_A}{2}$$

and also that $D_A = D_B$ (prisms have same diameter)

and that $R_A = R_B$ (same material & diameter)

So

$$F = \frac{W_A L_A}{2L_B} - \frac{W_B}{2} \quad \text{But } L_A = 2L_B$$

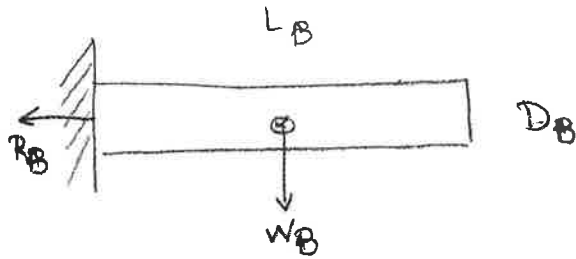
also,

$$W_A = \frac{150 \text{ lbs}}{\text{cu. ft}} \times 20 \text{ cu. ft} = 3000 \text{ lbs}$$

$$W_B = 150 \text{ lbs/cu. ft} \times 10 \text{ cu. ft} = 1500 \text{ lbs}$$

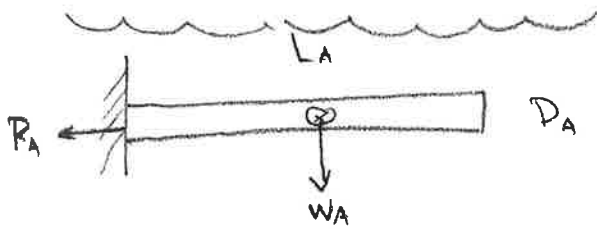
So $F = W_A - W_B/2 = \boxed{2250 \text{ lbs}}$

7.15)



This beam is about to break under its own weight.

$$D_B = 1 \text{ foot}, L_B = 20 \text{ feet}$$



This is a submerged beam about to break under its own weight. $L_A = 20 \text{ feet}$

$$D_A = ?$$

$$\frac{D_A}{D_B} = \frac{W_A L_A R_B}{W_B L_B R_A}$$

(same as in problem 1.)

$$= \frac{(g V_A \rho_l - g V_A \rho_w) L_A R_B}{g V_B \rho_l L_B R_A}$$

(since the weight of the submerged beam is reduced by buoyancy.)

ρ_l = density of limestone

ρ_w = density of water

$$= \frac{D_A^2 L_A (\rho_l - \rho_w) L_A D_B^2}{D_B^2 L_B \rho_l L_B D_A^2}$$

simplifying

$$\frac{D_A}{D_B} = \left(\frac{L_A}{L_B} \right)^2 \left(1 - \frac{\rho_w}{\rho_l} \right)$$

$$= (1)^2 \left(1 - \frac{62 \text{ lbs/ft}^3}{150 \text{ lbs/ft}^3} \right) = \boxed{0.59 \text{ feet}}$$